


Level 2

Exercise 1

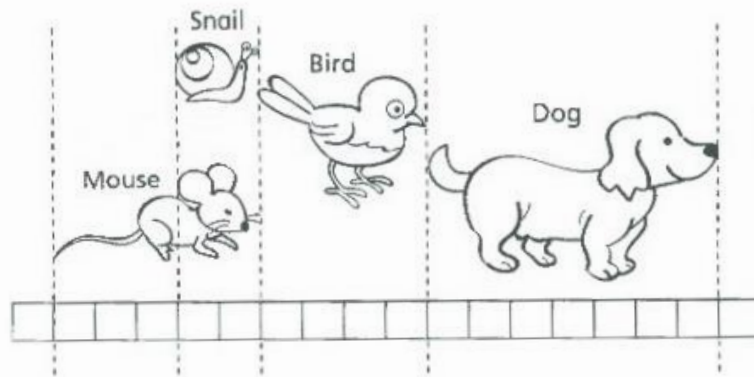
Use the diagram to complete questions 1 to 5.

Fill in the blanks with the correct number or word.



1. The giraffe is _____ units tall.
2. The tree is _____ units tall.
3. The elephant is _____ units tall.
4. The _____ is the tallest.
5. The _____ is the shortest.

Use the diagram to complete questions 6 to 10.
Fill in the blanks with the correct number or word.



6. The mouse is _____ ☐ long.
7. The snail is _____ ☐ long.
8. The mouse is shorter than the _____.
9. The bird is longer than the _____.
10. Arrange the animals in order from the shortest to the longest.

_____ / _____ / _____ / _____
shortest

Exercise 2

For questions 1 to 3, use a ruler to measure the lengths of these objects.

1.



The pencil is _____ cm long.

2.



The spoon is _____ cm long.

3.



The toothbrush is _____ cm long.

For questions 4 and 5, use a string and then a ruler to measure the lengths of these objects.

4.



The ribbon is _____ cm long.

5.



The rope is _____ cm long.

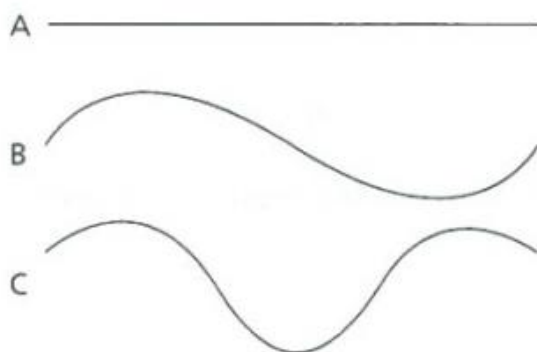
For questions 6 to 8, draw the required lines as stated.

6. 4 cm

7. 13 cm

8. 10 cm

Fill in the blanks with the correct answers for questions 9 and 10.



9. _____ is the shortest.

10. _____ is the longest.